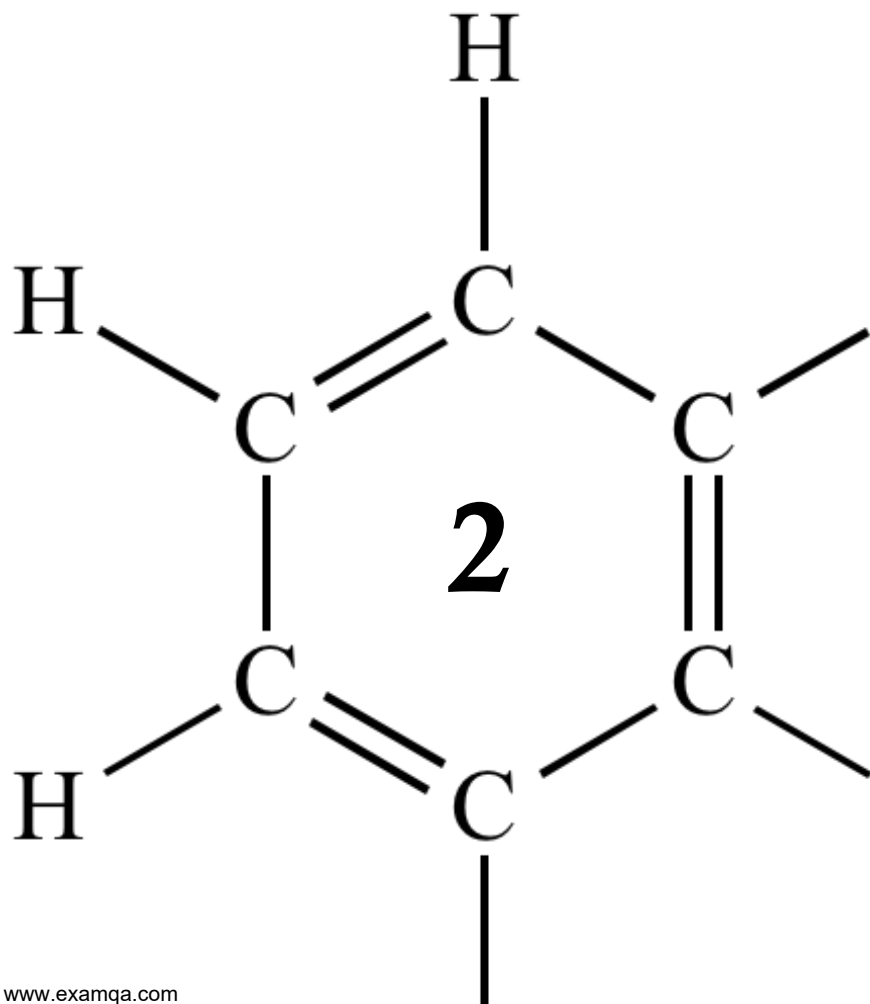


AQA A2 CHEMISTRY
ISOMERISM ~ CARBONYLS

ACYLATION



1

Aldehydes can be prepared from acyl chlorides.

State how an aldehyde could be tested to show whether it is contaminated with traces of unreacted acyl chloride.

State what you would observe.

Test

Observation

.....

(Total 2 marks)

2

Acyl chlorides such as CH_3COCl are useful compounds in synthesis.

(a) The acyl chloride CH_3COCl reacts with benzene.

(i) Write an equation for this reaction and name the organic product.

Identify a catalyst for the reaction.

Write an equation to show how this catalyst reacts with CH_3COCl to produce a reactive intermediate.

.....

.....

.....

.....

.....

.....

.....

.....

(4)

- (ii) Name and outline a mechanism for the reaction of benzene with the reactive intermediate in part (a)(i).

Name of mechanism

.....

Mechanism

(4)

- (b) Nucleophiles such as alcohols can react with CH_3COCl
The ion CH_3COO^- can act as a nucleophile in a similar way.

State the meaning of the term *nucleophile*.

Draw the structure of the organic product formed by the reaction of CH_3COO^- with CH_3COCl

Name the functional group produced in this reaction.

.....
.....
.....
.....
.....
.....
.....
.....
.....
.....

(3)

(Total 11 marks)

3

Acyl chlorides and acid anhydrides are important compounds in organic synthesis.

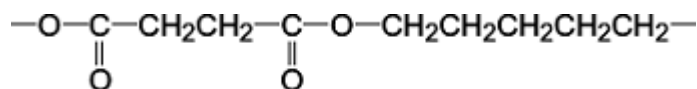
- (a) Outline a mechanism for the reaction of $\text{CH}_3\text{CH}_2\text{COCl}$ with CH_3OH and name the organic product formed.

Mechanism

Name of organic product

(5)

- (b) A polyester was produced by reacting a diol with a diacyl chloride. The repeating unit of the polymer is shown below.



- (i) Name the diol used.

.....

(1)

- (ii) Draw the displayed formula of the diacyl chloride used.

(1)

- (iii) A shirt was made from this polyester. A student wearing the shirt accidentally splashed aqueous sodium hydroxide on a sleeve. Holes later appeared in the sleeve where the sodium hydroxide had been.

Name the type of reaction that occurred between the polyester and the aqueous sodium hydroxide. Explain why the aqueous sodium hydroxide reacted with the polyester.

Type of reaction

Explanation

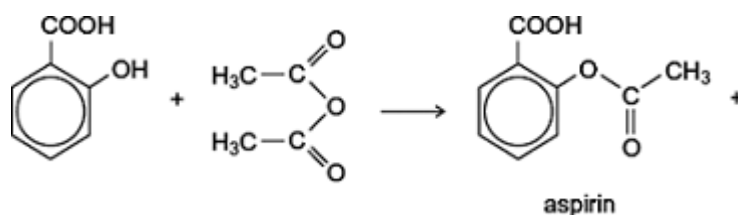
.....

.....

.....

(3)

- (c) (i) Complete the following equation for the preparation of aspirin using ethanoic anhydride by writing the structural formula of the missing product.



(1)

- (ii) Suggest a name for the mechanism for the reaction in part (c)(i).

.....

(1)

- (iii) Give **two** industrial advantages, other than cost, of using ethanoic anhydride rather than ethanoyl chloride in the production of aspirin.

Advantage 1

.....

.....

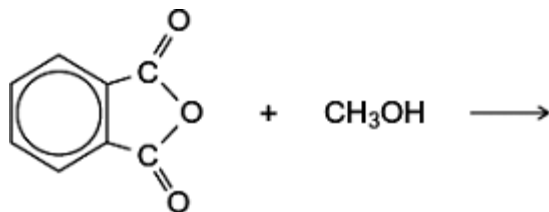
Advantage 2

.....

.....

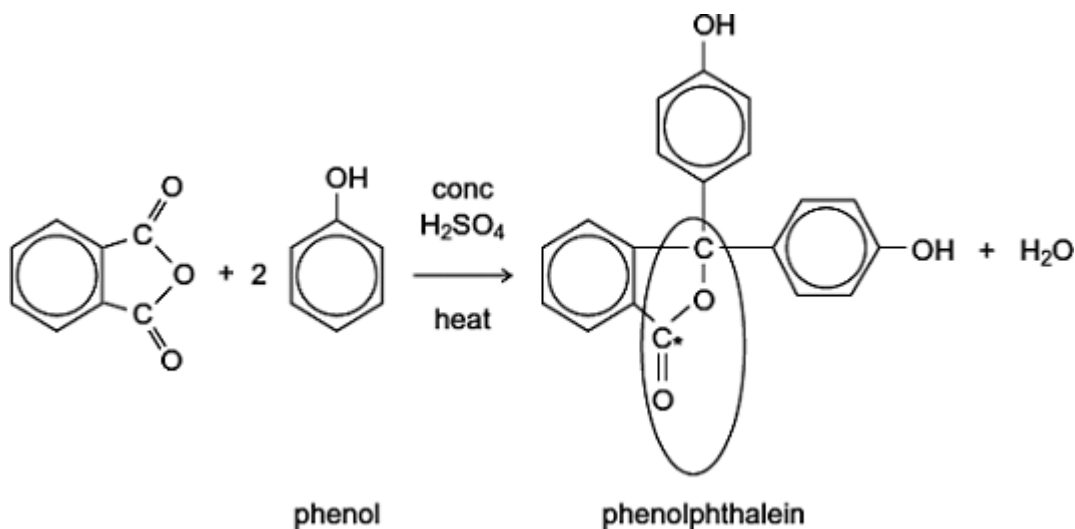
(2)

- (d) Complete the following equation for the reaction of one molecule of benzene-1,2-dicarboxylic anhydride (phthalic anhydride) with one molecule of methanol by drawing the structural formula of the single product



(1)

- (e) The indicator phenolphthalein is synthesised by reacting phthalic anhydride with phenol as shown in the following equation.



- (i) Name the functional group ringed in the structure of phenolphthalein.

.....

(1)

- (ii) Deduce the number of peaks in the ^{13}C n.m.r. spectrum of phenolphthalein.

.....

(1)

- (iii) One of the carbon atoms in the structure of phenolphthalein shown above is labelled with an asterisk (*).

Use **Table 3** on the Data Sheet to suggest a range of δ values for the peak due to this carbon atom in the ^{13}C n.m.r. spectrum of phenolphthalein.

.....

(1)

(f) Phenolphthalein can be used as an indicator in some acid–alkali titrations. The pH range for phenolphthalein is 8.3 – 10.0

(i) For **each** acid.alkali combination in the table below, put a tick (✓) in the box if phenolphthalein could be used as an indicator.

Acid	Alkali	Tick box (✓)
sulfuric acid	sodium hydroxide	
hydrochloric acid	ammonia	
ethanoic acid	potassium hydroxide	
nitric acid	methylamine	

(2)

(ii) In a titration, nitric acid is added from a burette to a solution of sodium hydroxide containing a few drops of phenolphthalein indicator. Give the colour **change** at the end-point.

.....

(1)

(Total 21 marks)

4

Salicylic acid can be used to make aspirin. Before using a sample of salicylic acid to make aspirin, a student purified the acid by recrystallisation. The method for recrystallisation is outlined below.

Step 1: The sample is dissolved in a minimum volume of hot water.

Step 2: The solution is filtered hot.

Step 3: The filtrate is cooled in ice to form crystals.

Step 4: The crystals are collected by filtration, washed with cold water and left to dry.

Explain the purpose of each underlined point.

Minimum volume

Hot water

Filtered hot

Cooled in ice

Washed with cold water

(Total 5 marks)

5

The reactions of molecules containing the chlorine atom are often affected by other functional groups in the molecule.

Consider the reaction of $\text{CH}_3\text{CH}_2\text{COCl}$ and of $\text{CH}_3\text{CH}_2\text{CH}_2\text{Cl}$ with ammonia.

- (a) For the reaction of $\text{CH}_3\text{CH}_2\text{COCl}$ with ammonia, name and outline the mechanism and name the organic product.

.....
.....
.....
.....
.....
.....
.....
.....
.....
.....
.....
.....
.....
.....
.....
.....
(Extra space)

(6)

(b) For the reaction of $\text{CH}_3\text{CH}_2\text{CH}_2\text{Cl}$ with an **excess** of ammonia, name and outline the mechanism and name the organic product.

.....
.....
.....
.....
.....
.....
.....
.....
.....
.....
.....
.....
.....
.....
.....
.....
.....
.....
.....
.....
.....
(Extra space)
.....
.....
.....
.....
.....
.....
.....
.....
.....
.....
.....

(6)

(c) Suggest **one** reason why chlorobenzene (C_6H_5Cl) does **not** react with ammonia under normal conditions.

.....
.....
.....
.....
(Extra space)
.....

(1)
(Total 13 marks)

6

Samples of 1-chloropropane and ethanoyl chloride can be distinguished by the addition of an aqueous solution of silver nitrate.
State what you would observe with each sample.

Observation with 1-chloropropane

.....
.....

Observation with ethanoyl chloride.

.....
.....

(Total 2 marks)